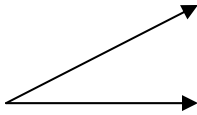
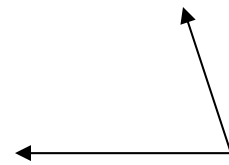


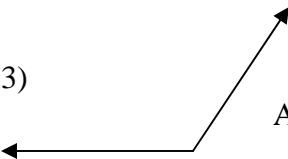
Name\_\_\_\_\_

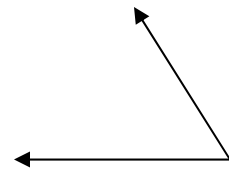
MEASURING ANGLES #1

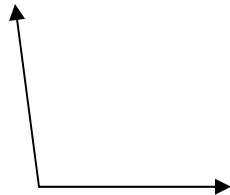
**Directions:** Use your protractor to measure each of the angles below. Write the measurement of each angle in the space provided.

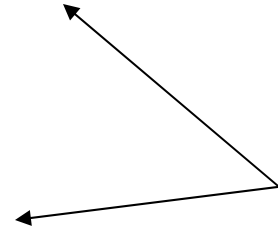
1)  Angle Meas. = \_\_\_\_\_

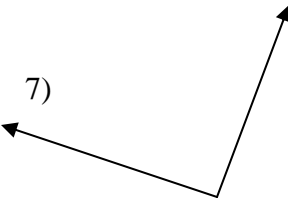
2)  Angle Meas. = \_\_\_\_\_

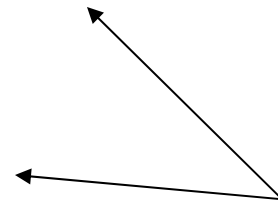
3)  Angle Meas. = \_\_\_\_\_

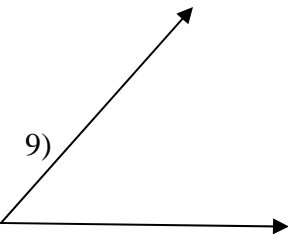
4)  Angle Meas. = \_\_\_\_\_

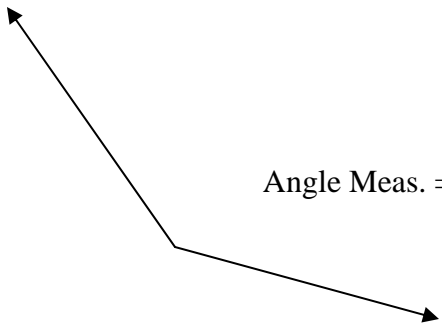
5)  Angle Meas. = \_\_\_\_\_

6)  Angle Meas. = \_\_\_\_\_

7)  Angle Meas. = \_\_\_\_\_

8)  Angle Meas. = \_\_\_\_\_

9)  Angle Meas. = \_\_\_\_\_

10)  Angle Meas. = \_\_\_\_\_