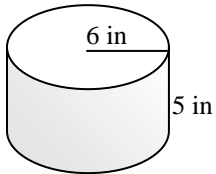


Name _____

VOLUME OF A CYLINDER #1

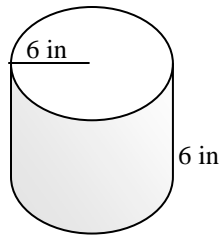
Directions: Find the volume of each cylinder below. The formula for the volume of a cylinder is $V = \pi r^2 h$. r stands for the radius and h stands for height. Leave your answer in terms of π . In other words, a typical volume should look like this $36\pi \text{ in}^3$.

1)



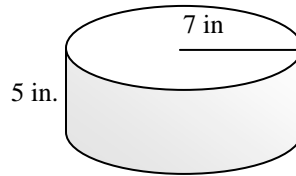
Volume = _____

2)



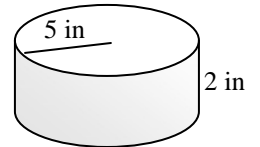
Volume = _____

3)



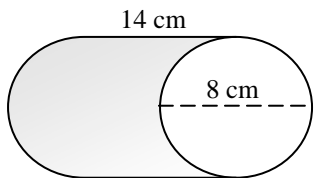
Volume = _____

4)



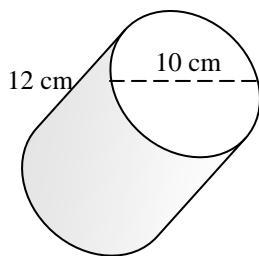
Volume = _____

5)



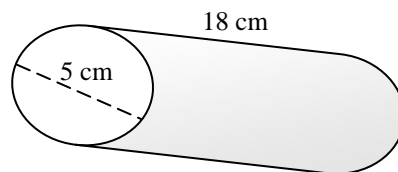
Volume = _____

6)



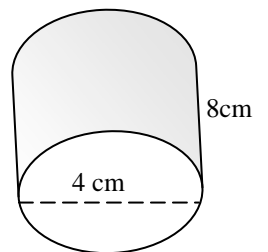
Volume = _____

7)



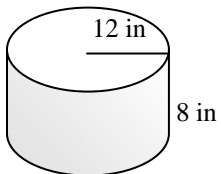
Volume = _____

8)



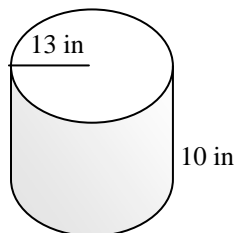
Volume = _____

9)



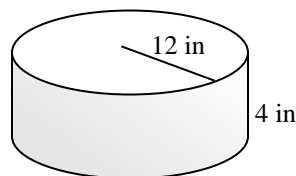
Volume = _____

10)



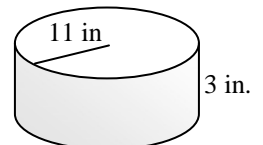
Volume = _____

11)



Volume = _____

12)



Volume = _____