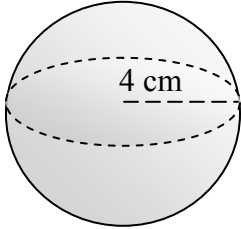


Name _____

VOLUME OF A SPHERE

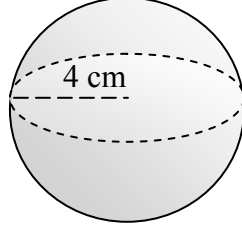
Directions: Find the volume of each sphere below. The formula to calculate the volume of a sphere is $V = \frac{4}{3} \pi r^3$, where r stands for the radius. Use 3.14 for π and round answers to the nearest hundredth.

1)



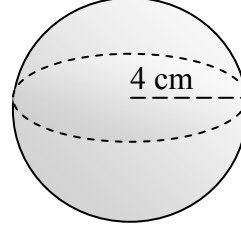
Volume = _____

2)



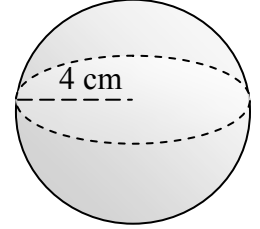
Volume = _____

3)



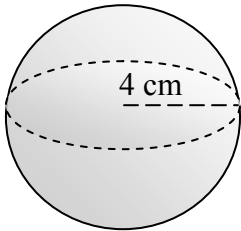
Volume = _____

4)



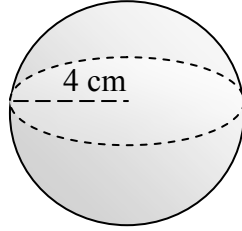
Volume = _____

5)



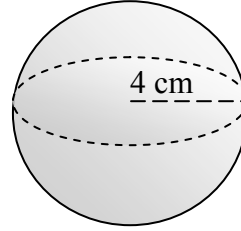
Volume = _____

6)



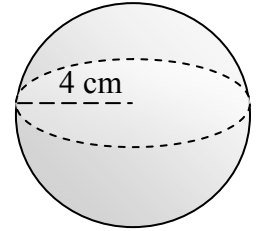
Volume = _____

7)



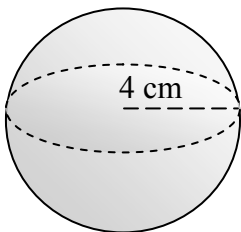
Volume = _____

8)



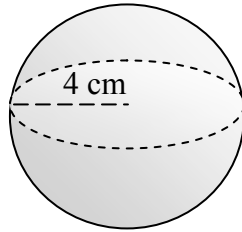
Volume = _____

9)



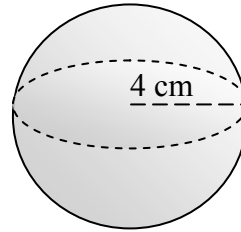
Volume = _____

10)



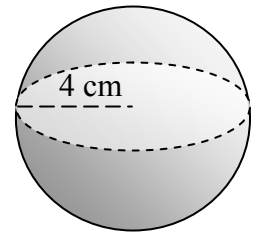
Volume = _____

11)



Volume = _____

12)



Volume = _____