



Name _____

MATCHING RATIOS #2

Directions: Match each ratio on the left with an equal ratio from the right side. Write the letter of the equivalent ratio in the space provided. You should use the *part-to-part* ratio of hearts to stars.

 H 1)  $\frac{10 \text{ hearts}}{2 \text{ stars}}$

 2) 

 3) 


 4) 

 5) 

 6) 

 7) 

 8) 

 9) 

 10) 

A. 

B. 

C. 

D. 

E. 

F. 

G. 

H.  $\frac{10 \text{ hearts}}{2 \text{ stars}}$

I. 

J. 