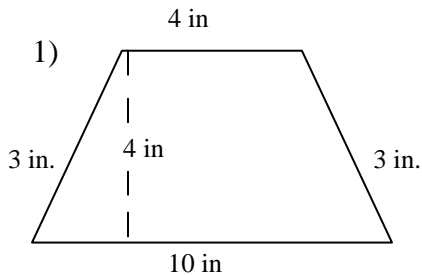


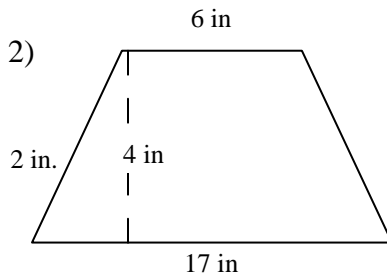
Name \_\_\_\_\_

### AREA OF A TRAPEZOID #6

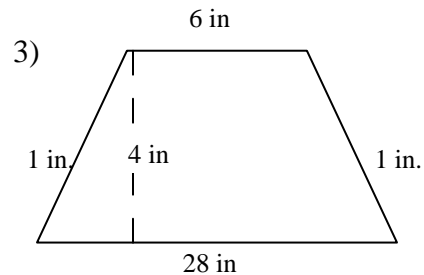
**Directions:** Find the area of each trapezoid. The formula to calculate the area of a trapezoid is  $Area = \frac{1}{2}(base\ 1 + base\ 2) \times height$ . Write your answer in the space provided.



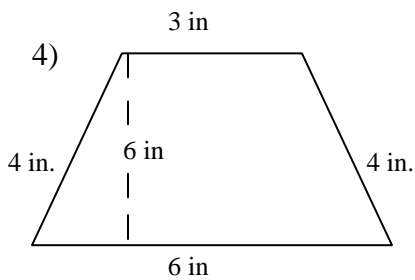
Area \_\_\_\_\_



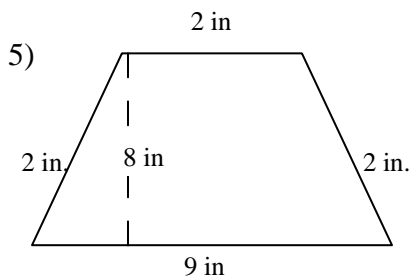
Area \_\_\_\_\_



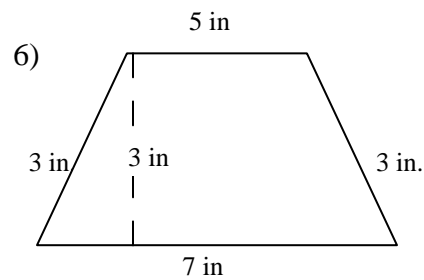
Area \_\_\_\_\_



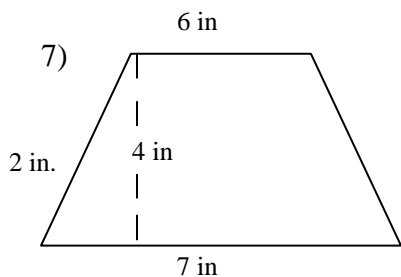
Area \_\_\_\_\_



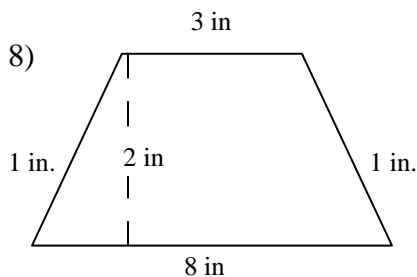
Area \_\_\_\_\_



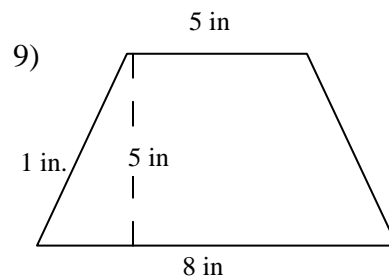
Area \_\_\_\_\_



Area \_\_\_\_\_



Area \_\_\_\_\_



Area \_\_\_\_\_