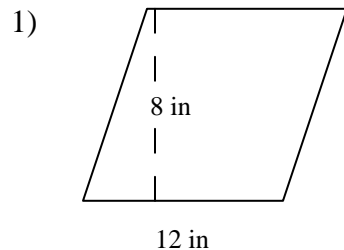


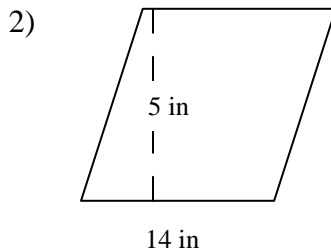
Name _____

AREA OF A PARALLELOGRAM #3

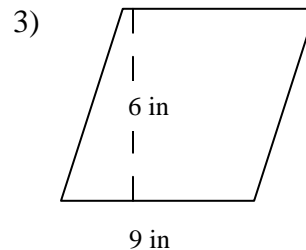
Directions: Find the area of parallelogram. The formula to calculate the area of a parallelogram is $\text{Area} = \text{the width of the base} \times \text{the vertical height}$. Write your answer in the space provided



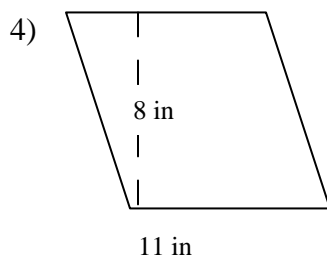
Area _____



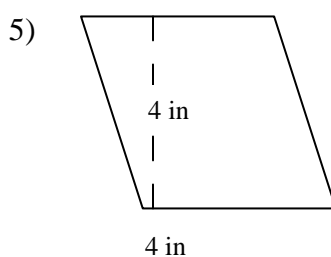
Area _____



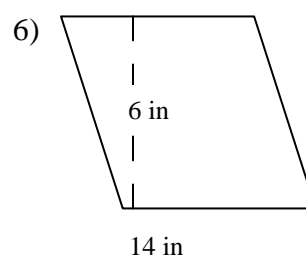
Area _____



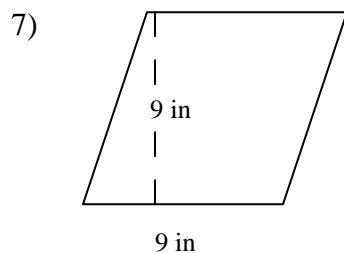
Area _____



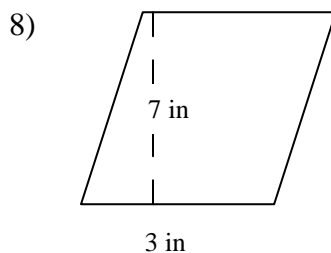
Area _____



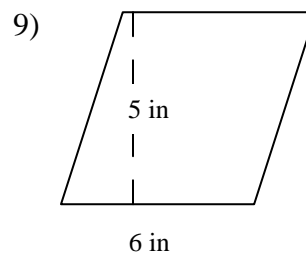
Area _____



Area _____



Area _____



Area _____